

Section : **General English**

Q.1 Select the most appropriate option to fill in the blank and make a grammatically correct sentence.

I wasn't feeling well yesterday, but I feel a little _____ today.

- Ans
- 1. good
 - 2. best
 - 3. better
 - 4. more better

Question ID : **2390872988**
Status : **Answered**
Chosen Option : **3**

Q.2 Select the correctly spelt word.

- Ans
- 1. Foaarth
 - 2. February
 - 3. Foriegn
 - 4. Foward

Question ID : **2390872999**
Status : **Answered**
Chosen Option : **2**

Q.3 Select the most appropriate synonym of the given word.

ABANDONED

- Ans
- 1. Continued
 - 2. Initiated
 - 3. Adopted
 - 4. Deserted

Question ID : **2390872990**
Status : **Answered**
Chosen Option : **4**

Q.4 Select the most appropriate antonym of the word.

APPLAUD

- Ans
- 1. Praise
 - 2. Clap

Get Testbook SmartBook & Practice 4000 Questions

Unique Features of SmartBook ✨

- Time To Answer (TTA)
- Smart Answer Key
- Level - Wise Difficulty
- Best 4000 Questions
- Solutions Inside



Best 4000 Smart Question Bank for SSC in

General Intelligence & Reasoning In English

[Buy Now](#)

[Download Free Chapter](#)

General Knowledge In English

[Buy Now](#)

[Download Free Chapter](#)

Quantitative Aptitude In English

[Buy Now](#)

[Download Free Chapter](#)

English Language

[Buy Now](#)

[Download Free Chapter](#)

Testbook SmartBook Available on



“ Just go for it.

Excellent book for competitive exams, proper solutions are provided with the different difficulty levels. Easy to read font.

★★★★★ 2200 + Global Reviews



3. Criticize

4. Cheer

Question ID : 2390872993
Status : Answered
Chosen Option : 3

Q.5 Select the most appropriate option to substitute the underlined segment in the given sentence. If there is no need to substitute it, select No improvement

I had to reconsider my decision as going to Syria might been dangerous.

- Ans
- 1. may have
 - 2. had to be
 - 3. might have been
 - 4. No improvement

Question ID : 2390872979
Status : Answered
Chosen Option : 3

Q.6 Select the correctly spelt word.

- Ans
- 1. Wayther
 - 2. Wadnesday
 - 3. Worthwile
 - 4. Weird

Question ID : 2390872998
Status : Answered
Chosen Option : 4

Q.7 Select the most appropriate word for the given group of words.

An animal that lives by killing and eating other animals

- Ans
- 1. Quadruped
 - 2. Prey
 - 3. Amphibian
 - 4. Predator

Question ID : 2390872996
Status : Answered
Chosen Option : 4

Q.8 Select the most appropriate synonym of the given word.

ADVANTAGEOUS

- Ans
- 1. Crucial
 - 2. Favourable
 - 3. Adverse
 - 4. Unlucky

Question ID : 2390872991

Chosen Option : 2

Q.9 Select the most appropriate word to fill in the blank and make a meaningful sentence.

It's a venue for every occasion and one that offers _____ meals on special days.

- Ans
- 1. offensive
 - 2. amusing
 - 3. delightful
 - 4. thrilling

Question ID : 2390873001
Status : Answered
Chosen Option : 3

Q.10 Select the most appropriate meaning of the given idiom.

When pigs fly

- Ans
- 1. An argument between two people
 - 2. A practical idea
 - 3. A time that will never come
 - 4. A difficult situation

Question ID : 2390872994
Status : Answered
Chosen Option : 3

Q.11 Identify the segment in the sentence which contains the grammatical error.

After a heated argument they went to their respective place.

- Ans
- 1. respective place
 - 2. After a heated argument
 - 3. they went
 - 4. to their

Question ID : 2390872978
Status : Answered
Chosen Option : 1

Comprehension:

In the following passage some words have been deleted. Fill in the blanks with the help of the alternatives given. Select the most appropriate option for each blank.

Throughout the ages, birds have been a source of wonder to all who have (1)_____ their soaring flight or listened to (2)_____ sweet songs. As a group, birds are (3)_____. They are the only creatures covered (4)_____ feathers. This evolutionary development (5)_____ birds from all other animals.

SubQuestion No : 12

Q.12 Select the most appropriate option to fill in blank No.1.

- Ans
- 1. observed
 - 2. supported
 - 3. claimed
 - 4. verified

Question ID : 2390872983
Status : Answered
Chosen Option : 1

Comprehension:

In the following passage some words have been deleted. Fill in the blanks with the help of the alternatives given. Select the most appropriate option for each blank.

Throughout the ages, birds have been a source of wonder to all who have (1)_____ their soaring flight or listened to (2)_____ sweet songs. As a group, birds are (3)_____. They are the only creatures covered (4)_____ feathers. This evolutionary development (5)_____ birds from all other animals.

SubQuestion No : 13

Q.13 Select the most appropriate option to fill in blank No.2.

- Ans 1. their
 2. they
 3. its
 4. them

Question ID : 2390872984
Status : Answered
Chosen Option : 1

Comprehension:

In the following passage some words have been deleted. Fill in the blanks with the help of the alternatives given. Select the most appropriate option for each blank.

Throughout the ages, birds have been a source of wonder to all who have (1)_____ their soaring flight or listened to (2)_____ sweet songs. As a group, birds are (3)_____. They are the only creatures covered (4)_____ feathers. This evolutionary development (5)_____ birds from all other animals.

SubQuestion No : 14

Q.14 Select the most appropriate option to fill in blank No.3.

- Ans 1. indifferent
 2. unique
 3. ordinary
 4. mundane

Question ID : 2390872985
Status : Answered
Chosen Option : 2

Comprehension:

In the following passage some words have been deleted. Fill in the blanks with the help of the alternatives given. Select the most appropriate option for each blank.

Throughout the ages, birds have been a source of wonder to all who have (1)_____ their soaring flight or listened to (2)_____ sweet songs. As a group, birds are (3)_____. They are the only creatures covered (4)_____ feathers. This evolutionary development (5)_____ birds from all other animals.

SubQuestion No : 15

Q.15 Select the most appropriate option to fill in blank No.4.

- Ans 1. at
 2. on

3. from

4. with

Question ID : 2390872986

Status : Answered

Chosen Option : 4

Comprehension:

In the following passage some words have been deleted. Fill in the blanks with the help of the alternatives given. Select the most appropriate option for each blank.

Throughout the ages, birds have been a source of wonder to all who have (1)_____ their soaring flight or listened to (2)_____ sweet songs. As a group, birds are (3)_____. They are the only creatures covered (4)_____ feathers. This evolutionary development (5)_____ birds from all other animals.

SubQuestion No : 16

Q.16 Select the most appropriate option to fill in blank No.5.

Ans 1. separates

2. has been separated

3. is separated

4. was separated

Question ID : 2390872987

Status : Answered

Chosen Option : 1

Q.17 Select the most appropriate antonym of the word.

Congested

Ans 1. Cleared

2. Choked

3. Crammed

4. Crowded

Question ID : 2390872992

Status : Answered

Chosen Option : 4

Q.18 Select the most appropriate word for the given group of words.

A large crowd of people intent on causing trouble or violence

Ans 1. Mob

2. Audience

3. Spectators

4. Procession

Question ID : 2390872997

Status : Marked For Review

Chosen Option : 4

Q.19 Identify the segment in the sentence which contains the grammatical error. If there is no error, select 'No Error'.

Sushmita's youngest sister is not only beautiful but even intelligent also.

- 1. is not only beautiful
- 2. but even intelligent also
- 3. No Error
- 4. Sushmita's youngest sister

Question ID : 2390872977
Status : Answered
Chosen Option : 2

Q.20 Select the most appropriate option to substitute the underlined segment in the given sentence. If there is no need to substitute it, select No improvement

While the teacher was scrutinizing the sums, Swaminathan was gazing on his face.

- Ans
- 1. gaze on
 - 2. gazing at
 - 3. gazed at
 - 4. No improvement

Question ID : 2390872981
Status : Answered
Chosen Option : 3

Q.21 Identify the segment in the sentence which contains the grammatical error.

Ram cannot withdraw all his money unless he does not give a prior notice.

- Ans
- 1. Ram cannot withdraw
 - 2. all his money
 - 3. a prior notice
 - 4. unless he does not give

Question ID : 2390872976
Status : Answered
Chosen Option : 4

Q.22 Select the most appropriate word to fill in the blank and make a meaningful sentence.

Winning both the races has been a _____ surprise, but the success is well deserved.

- Ans
- 1. pleasant
 - 2. satisfying
 - 3. civilized
 - 4. charming

Question ID : 2390873000
Status : Answered
Chosen Option : 1

Q.23 Select the most appropriate option to fill in the blank and make a grammatically correct sentence.

If I _____ that you were coming over, I would have cancelled my programme.

- Ans
- 1. had known

2. am knowing

3. know

4. knows

Question ID : 2390872989

Status : Answered

Chosen Option : 1

Q.24 Select the most appropriate option to substitute the underlined segment in the given sentence. If there is no need to substitute it, select No improvement

A little carefulness can have averted the accident.

Ans 1. could have averted

2. could have avert

3. No improvement

4. can averted

Question ID : 2390872980

Status : Answered

Chosen Option : 1

Q.25 Select the most appropriate meaning of the given idiom.

No strings attached

Ans 1. Without conditions or restrictions

2. Lacking clarity

3. Forced to do something

4. Involving a choice to be made

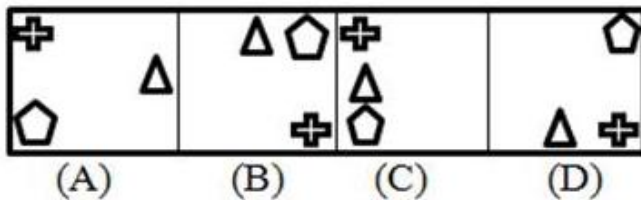
Question ID : 2390872995

Status : Answered

Chosen Option : 1

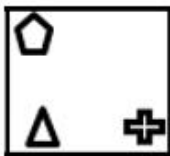
Section : General Intelligence & Reasoning

Q.1 Select the figure that will come next in the following series.

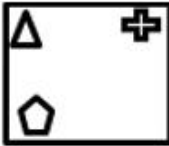


Ans

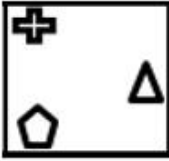
1.



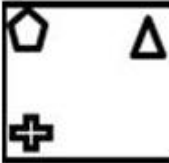
✗ 2.



✓ 3.



✗ 4.



Question ID : 2390873098
Status : Answered
Chosen Option : 3

Q.2 Select the number that can replace the question mark (?) in the following series.

-1, 5, 23, 59, 119, 209, ?

Ans ✓ 1. 335

✗ 2. 409

✗ 3. 309

✗ 4. 289

Question ID : 2390873092
Status : Answered
Chosen Option : 1

Q.3 If in a certain code language 'BHAI' is written as '2819', then how will 'CDGH' be written in that language?

Ans ✗ 1. 8437

✗ 2. 7348

✗ 3. 3487

✓ 4. 3478

Question ID : 2390873086
Status : Answered
Chosen Option : 4

Q.4 Select the option in which the given figure is embedded. (Rotation is not allowed)

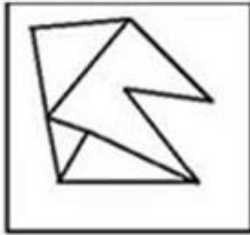


Ans

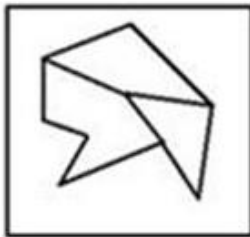
✗ 1.



✗ 2.



✗ 3.

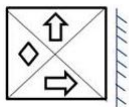


✓ 4.




Question ID : 2390873100
Status : Marked For Review
Chosen Option : 3

Q.5 Choose the option that most closely resembles the mirror image of the given Figure when mirror is placed at right side.

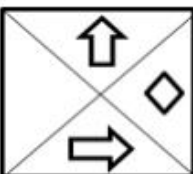


Ans

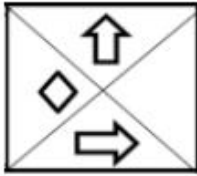
✓ 1.



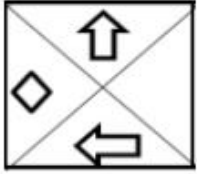
✗ 2.



✗ 3.



✗ 4.




Question ID : 2390873101
 Status : Answered
 Chosen Option : 1

Q.6 Choose the Venn diagram from the given options which best represents the relationship amongst the following classes:

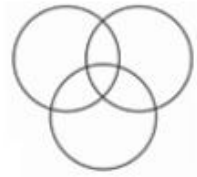
Fishes, sharks, dolphins

Ans

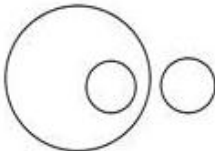
✗ 1.



✗ 2.



✓ 3.



✗ 4.



Question ID : 2390873103
 Status : Answered
 Chosen Option : 4

Q.7 Select the option that is related to the third term in the same way as the second term is related to the first term.

147:159::167:?

Ans

✓ 1. 181

✗ 2. 176

✗ 3. 143

✗ 4. 276

Status : **Answered**
Chosen Option : 1

Q.8 Select the option that is related to the third term in the same way as the second term is related to the first term.

Genuine : Authentic :: Mirage : ?

- Ans 1. Illusion
 2. Image
 3. Hideout
 4. Reflection

Question ID : **2390873080**
Status : **Answered**
Chosen Option : 1

Q.9 Read the given statement and conclusions carefully and decide which of the conclusions logically follow(s) from the statement.

Statement:

Only white colour vehicles should be allowed in India for promoting peace.

Conclusions:

- I. Blue colour vehicles promote peace.
II. White colour vehicles promote peace

- Ans 1. Only Conclusions II follows.
 2. Either conclusion I or conclusion II follows.
 3. Only Conclusion I follows.
 4. Neither conclusion I nor conclusion II follow

Question ID : **2390873091**
Status : **Answered**
Chosen Option : 1

Q.10 Five friends A, B, C, D and E bought cars which were priced differently. B's car was costlier than C's car but was less costly than E's car. A's car was costlier than D's car but less costly than C's car. Whose car was the 2nd costliest?

- Ans 1. E
 2. A
 3. C
 4. B

Question ID : **2390873089**
Status : **Answered**
Chosen Option : 4

Q.11 Select the letter cluster that will replace the question mark (?) in the following series.

ACEGI, BDFHJ, KMOQS, ? , UWYAC, VXZBD

- Ans 1. LNPRT
 2. LPRTV
 3. PQRTV
 4. TUVWX

Question ID : 2390873079
Status : Marked For Review
Chosen Option : 1

Q.12 If B=2 and BUT=43 then BOSS=?

- Ans
- 1. 56
 - 2. 57
 - 3. 59
 - 4. 55

Question ID : 2390873085
Status : Answered
Chosen Option : 4

Q.13 If '#' means '+', '@' means 'x', '&' means '/' and '\$' means '-' then
 $200 \& 5 @ 3 \$ 20 \# 5 = ?$

- Ans
- 1. 105
 - 2. 120
 - 3. 85
 - 4. 100

Question ID : 2390873097
Status : Answered
Chosen Option : 1

Q.14 Select the option that is related to the third term in the same way as the second term is related to the first term.

CINQ : EKPS :: FRGS : ?

- Ans
- 1. HITU
 - 2. ITJU
 - 3. HTIU
 - 4. HTUI

Question ID : 2390873082
Status : Answered
Chosen Option : 3

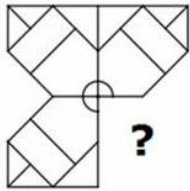
Q.15 If '+' means '-', '-' means 'x', '÷' means '+' and 'x' means '÷', then
 $10 \times 5 \div 3 - 2 + 3 = ?$

- Ans
- 1. 18
 - 2. 53/3
 - 3. 5
 - 4. 21

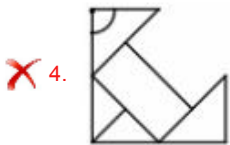
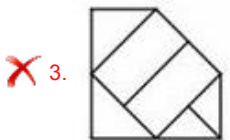
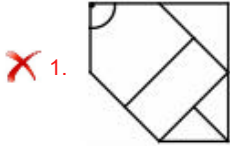
Question ID : 2390873096
Status : Answered
Chosen Option : 3

Q.16

Study the given pattern carefully and select the figure that can replace the question mark (?) in it.



Ans



Question ID : 2390873099
Status : Answered
Chosen Option : 2

Q.17 If $4 + 5 = 41$ and $10 + 12 = 244$, then $6 + 8 = ?$

- Ans 1. 96
 2. 100
 3. 200
 4. 88

Question ID : 2390873095
Status : Answered
Chosen Option : 2

Q.18 If in a certain code language, 'RAW' is written as 'TIN', 'NET' is written as 'SHG', how is 'WATER' written in that code?

- Ans 1. GHTIN
 2. NIGHT
 3. TINGH
 4. NIGTH

Question ID : 2390873083
Status : Answered

Q.19 'Lion' is related to 'Cub' in the same way as 'Cow' is related to _____.

- Ans
- 1. Foal
 - 2. Lamb
 - 3. Joey
 - 4. Calf

Question ID : 2390873081
Status : Answered
Chosen Option : 4

Q.20 Select the number that can replace the question mark (?) in the following series.

2807, 1400, 697, ?, 171, 84

- Ans
- 1. 84
 - 2. 697
 - 3. 346
 - 4. 371

Question ID : 2390873093
Status : Answered
Chosen Option : 3

Q.21 If in a certain language, 'EXECUTIVE' is coded as 'EVITUCEXE' then how is 'MAUSOLEUM' coded in that language?

- Ans
- 1. ALUEOSUMM
 - 2. MUELOSUMA
 - 3. MUELOSUAM
 - 4. AUUCOSLMM

Question ID : 2390873084
Status : Answered
Chosen Option : 3

Q.22 Six persons B, C, D, F, G and H are sitting in a row facing the north.
B and C are sitting at the ends.
F is sitting second to the left of C.
D is adjacent to both B and H.

What is the position of G with respect to F?

- Ans
- 1. Second to the right
 - 2. Second to the left
 - 3. Immediate left
 - 4. Immediate right

Question ID : 2390873087
Status : Answered
Chosen Option : 4

Q.23 Six friends A, B, C, D, E and F are sitting around a round table facing the centre. A sits second to the right of B, E sits second to the left of C. B doesn't sit adjacent to E. D does not sit opposite to E or C. Who sits to the immediate left of E?

- Ans
- 1. C
 - 2. B
 - 3. D
 - 4. A

Question ID : 2390873088
 Status : Marked For Review
 Chosen Option : 4

Q.24 Two statements are given, followed by two conclusions numbered I and II. Assuming the statements to be true, even if they seem to be at variance with commonly known facts, decide which of the conclusions logically follow(s) from the statements.

Statement:

- I. All tables are books.
- II. All pens are books.

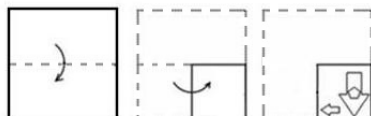
Conclusions:

- I. Some tables are pens.
- II. Some books are pens.

- Ans
- 1. Both conclusion I and conclusion II follow
 - 2. Only conclusion I follows
 - 3. Only conclusion II follows
 - 4. Either conclusion I or conclusion II follows

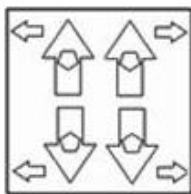
Question ID : 2390873090
 Status : Answered
 Chosen Option : 3

Q.25 The sequence of folding a piece of paper and the manner in which the folded paper has been cut is shown in the following figures. How would this paper look when unfolded?

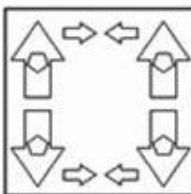


Ans

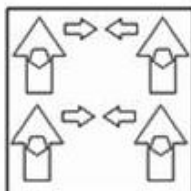
1.

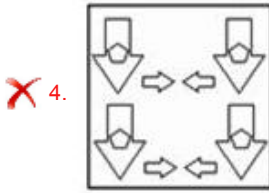


2.



3.





Question ID : 2390873102
Status : Answered
Chosen Option : 2

Section : Numerical Aptitude

Q.1 The volume of a sphere is $36\pi \text{ cm}^3$. What is the radius of the sphere?

- Ans 1. 3 cm
 2. 5 cm
 3. 4 cm
 4. 2 cm

Question ID : 2390872693
Status : Answered
Chosen Option : 1

Q.2 What is the value of:

$$2 - 2 \div 2 \times 2 + 2 (2 \text{ of } 2 - 2 - 2 \div 2) ?$$

- Ans 1. 0
 2. 4
 3. 1
 4. 2

Question ID : 2390872674
Status : Marked For Review
Chosen Option : 4

Q.3 A 600 metres long train can cross a 1200 metres long platform in 36 seconds. In how much time (in seconds) can it cross a bridge 2200 metres long?

- Ans 1. 44
 2. 52
 3. 56
 4. 48

Question ID : 2390872691
Status : Answered
Chosen Option : 3

Q.4 The difference between the selling prices of an article is ₹1440, when it is sold at 20% profit and 17.5% loss. What will be the selling price when it is sold at 15% profit?

- Ans 1. ₹4612
 2. ₹4218

✓ 3. ₹4416

✗ 4. ₹4108

Question ID : 2390872681

Status : **Marked For Review**

Chosen Option : 3

Q.5 A can do a piece of work alone in 10 days, whereas B alone can do it in 15 days. They work together and get ₹2000 for their work. What is the share of B?

Ans ✗ 1. ₹1200

✗ 2. ₹1000

✓ 3. ₹800

✗ 4. ₹1600

Question ID : 2390872688

Status : **Answered**

Chosen Option : 3

Q.6 What is difference between mean and median of the given data:

4, 6, 3, 7, 10, 13, 16 and 5 ?

Ans ✗ 1. 5

✓ 2. 1.5

✗ 3. 4.5

✗ 4. 3

Question ID : 2390872679

Status : **Answered**

Chosen Option : 3

Q.7 A sum becomes ₹500 in 5 years and ₹600 in 7 years at a certain rate percent p.a of simple interest. What is the sum?

Ans ✗ 1. ₹400

✗ 2. ₹200

✗ 3. ₹300

✓ 4. ₹250

Question ID : 2390872686

Status : **Answered**

Chosen Option : 4

Q.8 What is the compound interest on ₹5000 in 2 years at the rate of 20% per annum? (interest compounded half yearly)

Ans ✗ 1. ₹2275.50

✗ 2. ₹2290.50

✓ 3. ₹2320.50

✗ 4. ₹2340.50

Question ID : 2390872687

Status : **Answered**

Chosen Option : 3

The sum of two numbers x and y is 48 and their difference is 6. Then $x : y = ?$

- Ans
- 1. 8 : 9
 - 2. 3 : 7
 - 3. 7 : 6
 - 4. 9 : 7

Question ID : 2390872684
Status : **Marked For Review**
Chosen Option : 4

Q.10 A sum is divided between two persons in the ratio 3 : 2. If one person got ₹12 less than the other person, then what is the sum?

- Ans
- 1. ₹50
 - 2. ₹44
 - 3. ₹72
 - 4. ₹60

Question ID : 2390872685
Status : **Answered**
Chosen Option : 4

Q.11 The Table presents the amount of milk (in litres) sold by two milkmen in eight days.

Days	Milkman 1	Milkman 2
1	28	31
2	34	32
3	38	43
4	37	41
5	53	49
6	58	59
7	63	62
8	67	69

The total amount of milk (in litres) sold by milkman 2 in all 8 days is what percent (correct to one decimal place) more than the total amount of milk sold by milkman 1 in first six days?

- Ans
- 1. 58.9
 - 2. 55.6
 - 3. 57.2
 - 4. 56.8

Question ID : 2390872696
Status : **Marked For Review**
Chosen Option : 2

Q.12 Marked price of an article is ₹1500. If $16\frac{2}{3}\%$ discount is given, then what is the selling price?

- Ans
- 1. ₹1000
 - 2. ₹1300
 - 3. ₹1250
 - 4. ₹1150

Question ID : 2390872678
Status : **Answered**
Chosen Option : 3

Q.13 Cost price of an article is ₹1440 and its selling price is ₹1800. What is the profit percentage?

- Ans
- 1. 12.5%
 - 2. 20%
 - 3. 15%
 - 4. 25%

Question ID : 2390872682
Status : Answered
Chosen Option : 4

Q.14 What is the greatest number which can exactly divide 192, 1056 and 1584?

- Ans
- 1. 44
 - 2. 36
 - 3. 56
 - 4. 48

Question ID : 2390872673
Status : Answered
Chosen Option : 4

Q.15 The volume of a right circular cylinder is 3 times the volume of a right circular cone. The radius of the cone and the cylinder are 3 cm and 6 cm respectively. If the height of the cylinder is 1 cm, then what is the slant height of the cone?

- Ans
- 1. 5 cm
 - 2. $\sqrt{15}$ cm
 - 3. 4 cm
 - 4. $\sqrt{13}$ cm

Question ID : 2390872692
Status : Answered
Chosen Option : 1

Q.16 The Table presents the amount of milk (in litres) sold by two milkmen in eight days.

Days	Milkman 1	Milkman 2
1	28	31
2	34	32
3	38	43
4	37	41
5	53	49
6	58	59
7	63	62
8	67	69

If A is the total amount (in litres) of milk sold by milkman 1 in day2 and day3, and B is the total amount (in litres) of milk sold by milkman 2 in day7 and day8 then $(B - A)$ is equal to:

- Ans
- 1. 56
 - 2. 58
 - 3. 57
 - 4. 59

Question ID : 2390872697
Status : Answered

Q.17 Average age of 12 students is 14 years. If the age of teacher is also included, the average becomes 15 years. What is the age of the teacher?

- Ans
- 1. 23 years
 - 2. 25 years
 - 3. 27 years
 - 4. 28 years

Question ID : 2390872676
Status : Answered
Chosen Option : 3

Q.18 12.5% of A = 55. What is the value of A?

- Ans
- 1. 550
 - 2. 440
 - 3. 480
 - 4. 500

Question ID : 2390872680
Status : Answered
Chosen Option : 2

Q.19 What is the value of :

$$3\frac{3}{4} - \frac{61}{122} + \frac{9}{2} \div \frac{1}{2} \text{ of } \frac{4}{3} \left(1 + \frac{1}{3}\right) + \frac{1}{2} \times \frac{4}{3} ?$$

- Ans
- 1. 3
 - 2. $\frac{155}{12}$
 - 3. $\frac{163}{11}$
 - 4. 9

Question ID : 2390872675
Status : Answered
Chosen Option : 3

Q.20 The ratio of two numbers is 2 : 1. If each number is increased by 5, then the new ratio becomes 3 : 2. What is the sum of the numbers?

- Ans
- 1. 20
 - 2. 30
 - 3. 45
 - 4. 15

Question ID : 2390872683
Status : Answered
Chosen Option : 4

Q.21

Pipe A can fill a tank in 10 hours. Pipe B can fill the same tank in 12 hours. Pipe C can empty the full tank in 16 hours. All the pipes are opened at 8 : 00 A.M. and Pipe A and B are closed at 10 : 00 A.M. After how much time from starting will the tank be empty?

- Ans
- 1. 4 hours 8 minutes
 - 2. 4 hours 30 minutes
 - 3. 5 hours 24 minutes
 - 4. 5 hours 52 minutes

Question ID : 2390872689
 Status : Answered
 Chosen Option : 1

Q.22 The Table presents the amount of milk (in litres) sold by two milkmen in eight days.

Days	Milkman 1	Milkman 2
1	28	31
2	34	32
3	38	43
4	37	41
5	53	49
6	58	59
7	63	62
8	67	69

What is the difference between the average milk sold per day by Milkman 1 and the average milk sold by Milkman 2 per day?

- Ans
- 1. 2 litre
 - 2. 1 litre
 - 3. 3 litre
 - 4. 4 litre

Question ID : 2390872695
 Status : Answered
 Chosen Option : 2

Q.23 Speed of a man is 45 km/h. In how much time (in seconds) will he cover a distance of 225 metres?

- Ans
- 1. 16
 - 2. 18
 - 3. 24
 - 4. 22

Question ID : 2390872690
 Status : Answered
 Chosen Option : 2

Q.24 What are respectively the curved surface area and volume of a hemisphere of radius 21 cm?

(Take $\pi = \frac{22}{7}$)

- Ans
- 1. 2772 cm², 4158 cm³
 - 2. 4158 cm², 19404 cm³
 - 3. 2772 cm², 9702 cm³
 - 4. 2772 cm², 19404 cm³

Question ID : 2390872694
Status : Answered
Chosen Option : 4

Q.25 Average of 10 numbers is 14.8. If two numbers 5 and 23 are replaced by 13 and 26 respectively, then what is the new average?

- Ans
- 1. 13.8
 - 2. 16.3
 - 3. 15.9
 - 4. 14.5

Question ID : 2390872677
Status : Answered
Chosen Option : 3

Section : General awareness

Q.1 Kapaleeswarar Temple in Tamil Nadu is dedicated to which Indian God?

- Ans
- 1. Durga
 - 2. Brahma
 - 3. Vishnu
 - 4. Shiva

Question ID : 2390872823
Status : Answered
Chosen Option : 2

Q.2 In terms of total land area what is India's rank in the world in the list of largest countries?

- Ans
- 1. 7
 - 2. 5
 - 3. 4
 - 4. 6

Question ID : 2390872844
Status : Answered
Chosen Option : 1

Q.3 The commonly used Vitamin B Complex is constituted of how many vitamins?

- Ans
- 1. 8
 - 2. 10
 - 3. 12
 - 4. 6

Question ID : 2390872838
Status : Answered
Chosen Option : 3

Q.4 Bathukamma festival is celebrated in which state of India?

- Ans
- 1. Uttar Pradesh

- 2. Punjab
- 3. Telangana
- 4. Maharashtra

Question ID : 2390872825
Status : **Marked For Review**
Chosen Option : 3

Q.5 When did the Constituent Assembly adopt the Constitution of India?

- Ans
- 1. 26th January 1947
 - 2. 26th January 1950
 - 3. 26th November 1949
 - 4. 26th November 1947

Question ID : 2390872834
Status : **Answered**
Chosen Option : 3

Q.6 Exchange of gases occurs through which part of the plant tissue?

- Ans
- 1. Midrib
 - 2. Stomata
 - 3. Phloem
 - 4. Xylem

Question ID : 2390872837
Status : **Answered**
Chosen Option : 2

Q.7 Which film has won the IIFA best film Award 2018?

- Ans
- 1. Tumhari Sulu
 - 2. Hindi Medium
 - 3. Newton
 - 4. Mom

Question ID : 2390872829
Status : **Answered**
Chosen Option : 2

Q.8 India lifted South Asian Football Federation SAFF Women's Championship for how many times in a row in March 2019?

- Ans
- 1. 4th
 - 2. 3rd
 - 3. 6th
 - 4. 5th

Question ID : 2390872827
Status : **Answered**
Chosen Option : 1

- Ans 1. Adenosine Triphosphate
 2. Adenosine Phosphate
 3. Glycine Triphosphate
 4. Adenosine Diphosphate

Question ID : 2390872839
Status : Answered
Chosen Option : 1

Q.10 The percentage of deposits which a bank must keep as cash reserves with itself is known as _____.

- Ans 1. Cash Reserve Ratio
 2. Capital Output Ratio
 3. Statutory Liquidity Ratio
 4. Liquidity Reserve Ratio

Question ID : 2390872833
Status : Answered
Chosen Option : 1

Q.11 With reference to the famous monastries of India, which of the following pairs is incorrect?

- Ans 1. Ghum-Jammu and Kashmir
 2. Rumtek-Sikkim
 3. Key-Himachal Pradesh
 4. Tawang-Arunachal Pradesh

Question ID : 2390872824
Status : Answered
Chosen Option : 3

Q.12 The Battle of Karnal in 1739 was fought between Nadir Shah and whom among the following?

- Ans 1. Akbar Shah
 2. Bahadur Shah Zafar
 3. Aurangzeb
 4. Muhammad Shah

Question ID : 2390872846
Status : Answered
Chosen Option : 4

Q.13 Members of which National Association were led by Chandrashekhar Azad and Bhagat Singh?

- Ans 1. Indian National Congress
 2. Rashtiya Sewa Sangh
 3. Hindustan Socialist Republican Association
 4. Communist Party of India

Question ID : 2390872847
Status : Answered
Chosen Option : 3

Q.14 Where is the head office of Vijaya Bank situated?

- Ans 1. Bangalore
 2. Mumbai
 3. Kolkata
 4. Delhi

Question ID : 2390872832
Status : Marked For Review
Chosen Option : 2

Q.15 Which of the following is NOT a type of Fungi?

- Ans 1. Aspergillus
 2. Penicillium
 3. Agarics
 4. Gonyaulax

Question ID : 2390872841
Status : Answered
Chosen Option : 4

Q.16 Paytm partnered with which of the following institutions to help customers make insurance premium payments online in November 2018?

- Ans 1. Life Insurance Corporation
 2. United India Insurance
 3. Oriental Insurance Company
 4. General Insurance Company

Question ID : 2390872831
Status : Not Answered
Chosen Option : --

Q.17 In which year was the Battle of Saragarhi fought?

- Ans 1. 1897
 2. 1870
 3. 1880
 4. 1890

Question ID : 2390872845
Status : Not Answered
Chosen Option : --

Q.18 Which of the following is NOT a coastal landform?

- Ans 1. Moraines
 2. Sea Stacks
 3. Sea Caves

 4. Sea Cliff

Question ID : 2390872842
Status : Not Answered
Chosen Option : --

Q.19 As of January 2019, Agriculture as a subject is included in which list of the Constitution?

- Ans  1. Concurrent List
 2. State List
 3. Union list
 4. Residuary Powers

Question ID : 2390872836
Status : Answered
Chosen Option : 1

Q.20 The largest inhabited riverine island is located on which river?

- Ans  1. Krishna
 2. Ganga
 3. Godavari
 4. Brahmaputra





Question ID : 2390872843
Status : Answered
Chosen Option : 4

Q.21 The Right of Children to Free and Compulsory Education (RTE) Act, which gives every child aged 6-14 the fundamental right for education, was assented to in which year?

- Ans  1. 1975
 2. 1947
 3. 2001
 4. 2009

Question ID : 2390872835
Status : Marked For Review
Chosen Option : 3

Q.22 Atoms of different elements with different atomic numbers, having same mass number is known as _____.

- Ans  1. Ion
 2. Isohalines
 3. Isobars
 4. Isotopes

Question ID : 2390872840
Status : Answered
Chosen Option : 3

Q.23 Which Organisation has won the 2018 Indira Gandhi Prize for Peace Disarmament and Development?

- 1. NITI Aayog
- 2. Wildlife International
- 3. Centre for Science and Environment
- 4. Peace for India

Question ID : 2390872830
Status : Answered
Chosen Option : 2

Q.24 'Akbarnama' and 'Ain-i-Akbari' are written by _____.

- Ans
- 1. Ziauddin Barani
 - 2. Abul Fazal
 - 3. Abdul Qadir Badayuni
 - 4. Akbar

Question ID : 2390872828
Status : Answered
Chosen Option : 2

Q.25 Who won Hero Indian Super League 2018-19?

- Ans
- 1. Atletico de Kolkata
 - 2. FC Goa
 - 3. Kerala Blasters
 - 4. Bengaluru FC

Question ID : 2390872826
Status : Answered
Chosen Option : 4