

Multi Tasking (Non-Technical) Staff Examination 2019

Roll No.	
Registration No.	
Name	
Test Venue	iON Digital Zone iDZ Madhyamgram
Test Time	9:00 AM - 10:30 AM
Test Date	02/08/2019

Section : General English

Q.1 Choose the correctly spelt word.

- Ans
- 1. Hotiness
 - 2. Haughtyness
 - 3. Haughtiness
 - 4. Hautiness

Question ID : 23908723
Status : Not Answered
Chosen Option : --

Q.2 Choose the correctly spelt word.

- Ans
- 1. Gramar
 - 2. Gramer
 - 3. Grammar
 - 4. Grammer

Question ID : 23908724
Status : Answered
Chosen Option : 3

Q.3 Select the most appropriate option to fill in the blank.
Her parents always _____ her in her studies.

- Ans
- 1. encouraged
 - 2. interested
 - 3. impressed
 - 4. expected

Question ID : 23908725
Status : Answered
Chosen Option : 1

Q.4 Select the most appropriate antonym of the given word.
Fertile

- Ans
- 1. Barren
 - 2. Civilized
 - 3. Sane
 - 4. Tough

Question ID : 23908717
Status : Not Answered
Chosen Option : --

Q.5 Choose the most appropriate word that can substitute the given group of words.
One who pretends to be what he is not

- Ans
- 1. Director
 - 2. Hypocrite
 - 3. Creator
 - 4. Acrobat

Question ID : 23908722
Status : Answered
Chosen Option : 2

Q.6 Select the most appropriate antonym of the given word.
Acute

- Ans
- 1. Dark
 - 2. Clever
 - 3. Grave
 - 4. Blunt

Question ID : 23908718
Status : Answered
Chosen Option : 4

Q.7 Select the most appropriate synonym of the given word.
Deepen

- Ans
- 1. Soothe
 - 2. Neutralize
 - 3. Relieve
 - 4. Intensify

Question ID : 23908715
Status : Not Answered
Chosen Option : --

Q.8 Select the most appropriate meaning of the given idiom.
The ball is in (one's) court

- Ans
- 1. To be responsible for further action
 - 2. To pass the responsibility to another
 - 3. To be fearful of taking any action
 - 4. To risk everything in one venture

Question ID : 23908720
Status : Answered
Chosen Option : 2

Q.9 Select the most appropriate option to fill in the blank.
The entry gates were closed _____ we could enter in.

- Ans
- 1. till

2. before

3. after

4. until

Question ID : 23908726

Status : Answered

Chosen Option : 2

Q.10 Find the part of the given sentence that has an error in it. If there is no error, choose 'No error'.

I told the tailor/to made a new/dress for me. /No error.

Ans 1. dress for me

2. I told the tailor

3. No error

4. to made a new

Question ID : 2390872

Status : Not Answered

Chosen Option : --

Q.11 Find the part of the given sentence that has an error in it. If there is no error, choose 'No error'.

The lady/standing in the/corner is fat. /No error.

Ans 1. corner is fat

2. No error

3. standing in the

4. The lady

Question ID : 2390873

Status : Answered

Chosen Option : 3

Q.12 Select the most appropriate option to substitute the underlined segment in the given sentence. If there is no need to substitute it, select No Improvement.

Please tell the story in a nutshell.

Ans 1. at a nutshell

2. in the nutshell

3. in nutshells

4. No Improvement

Question ID : 2390874

Status : Answered

Chosen Option : 4

Q.13 Select the most appropriate option to substitute the underlined segment in the given sentence. If there is no need to substitute it, select No Improvement.

He did not like the novel, nor I did.

Ans 1. nor did I

2. No Improvement

3. nor I like it

4. nor did I likes it

Question ID : 2390875
Status : Not Answered
Chosen Option : --

Q.14 Choose the most appropriate word that can substitute the given group of words.
A place where nuns live and work

- Ans 1. Convent
 2. Dormitory
 3. Hostel
 4. Quarter

Question ID : 23908721
Status : Answered
Chosen Option : 1

Q.15 Find the part of the given sentence that has an error in it. If there is no error, choose 'No error'.
It was not possible/for we/to understand her. /No error.

- Ans 1. for we
 2. to understand her
 3. It was not possible
 4. No error

Question ID : 2390871
Status : Answered
Chosen Option : 1

Q.16 Select the most appropriate option to fill in the blank.
_____ you like some water?

- Ans 1. Do
 2. Would
 3. Shall
 4. Can

Question ID : 2390877
Status : Answered
Chosen Option : 2

Q.17 Select the most appropriate synonym of the given word.
Courage

- Ans 1. Meekness
 2. Valour
 3. Humility
 4. Timidity

Question ID : 23908716
Status : Not Answered
Chosen Option : --

Q.18 Select the most appropriate option to fill in the blank.
We must start now _____ it will be too late.

- Ans 1. until
 2. unless
 3. or
 4. but

Question ID : 2390878
Status : Answered
Chosen Option : 2

Comprehension:

In the following passage some words have been deleted. Fill in the blanks with the help of the alternatives given. Select the most appropriate option for each blank.

Humanity can be (1)_____ as the quality of being human; the peculiar nature (2)_____ man, by which he is distinguished (3)_____ other beings. Being human (4)_____ not mean that an individual possesses humanity. One of the (5)_____ outstanding examples of extraordinary humanity in a human being has been portrayed beautifully by Mother Teresa.

SubQuestion No : 19

Q.19 Select the most appropriate option for blank No. 1.

- Ans 1. define
 2. defining
 3. defined
 4. defines

Question ID : 23908710
Status : Answered
Chosen Option : 3

Comprehension:

In the following passage some words have been deleted. Fill in the blanks with the help of the alternatives given. Select the most appropriate option for each blank.

Humanity can be (1)_____ as the quality of being human; the peculiar nature (2)_____ man, by which he is distinguished (3)_____ other beings. Being human (4)_____ not mean that an individual possesses humanity. One of the (5)_____ outstanding examples of extraordinary humanity in a human being has been portrayed beautifully by Mother Teresa.

SubQuestion No : 20

Q.20 Select the most appropriate option for blank No. 2.

- Ans 1. of
 2. in
 3. at
 4. to

Question ID : 23908711
Status : Answered
Chosen Option : 1

Comprehension:

In the following passage some words have been deleted. Fill in the blanks with the help of the alternatives given. Select the most appropriate option for each blank.

Humanity can be (1)_____ as the quality of being human; the peculiar nature (2)_____ man, by which he is distinguished (3)_____ other beings. Being human (4)_____ not mean that an individual possesses humanity. One of the (5)_____ outstanding examples of extraordinary humanity in a human being has been portrayed beautifully by Mother Teresa.

SubQuestion No : 21

Q.21 Select the most appropriate option for blank No. 3.

- Ans
- 1. along
 - 2. for
 - 3. by
 - 4. from

Question ID : 23908712
Status : Answered
Chosen Option : 4

Comprehension:

In the following passage some words have been deleted. Fill in the blanks with the help of the alternatives given. Select the most appropriate option for each blank.

Humanity can be (1)_____ as the quality of being human; the peculiar nature (2)_____ man, by which he is distinguished (3)_____ other beings. Being human (4)_____ not mean that an individual possesses humanity. One of the (5)_____ outstanding examples of extraordinary humanity in a human being has been portrayed beautifully by Mother Teresa.

SubQuestion No : 22

Q.22 Select the most appropriate option for blank No. 4.

- Ans
- 1. had
 - 2. does
 - 3. has
 - 4. did

Question ID : 23908713
Status : Answered
Chosen Option : 2

Comprehension:

In the following passage some words have been deleted. Fill in the blanks with the help of the alternatives given. Select the most appropriate option for each blank.

Humanity can be (1)_____ as the quality of being human; the peculiar nature (2)_____ man, by which he is distinguished (3)_____ other beings. Being human (4)_____ not mean that an individual possesses humanity. One of the (5)_____ outstanding examples of extraordinary humanity in a human being has been portrayed beautifully by Mother Teresa.

SubQuestion No : 23

Q.23 Select the most appropriate option for blank No. 5.

- Ans
- 1. more
 - 2. many
 - 3. most
 - 4. much

Question ID : 23908714
Status : Answered
Chosen Option : 3

Q.24 Select the most appropriate option to substitute the underlined segment in the given sentence. If there is no need to substitute it, select No Improvement.
The father with his children were expected to attend the function.

- Ans
- 1. are
 - 2. have
 - 3. No Improvement
 - 4. was

Question ID : 2390876
Status : Answered
Chosen Option : 1

Q.25 Select the most appropriate meaning of the given idiom.
Bend over backwards

- Ans
- 1. To express sudden shock
 - 2. To exert a lot of effort towards some end
 - 3. To end all activities
 - 4. To confess to a crime

Question ID : 23908719
Status : Not Answered
Chosen Option : --

Section : General Intelligence & Reasoning

Q.1 Five articles, bat, ball, fan, table and chair, are kept one above the other (not necessarily in the same order). The bat is four places above the fan. The table is between the ball and the chair. The chair is three places below the bat. Which article is at the second position from the top?

- Ans
- 1. Fan
 - 2. Table
 - 3. Ball
 - 4. Chair

Question ID : 239087266
Status : Answered
Chosen Option : 3

Q.2 Five teachers, H, K, P, R and T, are sitting around a circular table facing towards the centre (not necessarily in the same order). T is between H and R. P is second to the right of R. H is to the immediate left of T. Who is sitting to the immediate left of K?

- Ans
- 1. T
 - 2. H
 - 3. P
 - 4. R

Question ID : 239087265
Status : Answered
Chosen Option : 4

Q.3 In a certain code language, 'RIGIDS' is written as 'TFIFFP'. What will be the code for 'CORNET' in that code language?

- Ans
- 1. GNVNIS
 - 2. FMULHR
 - 3. ELTKRQ
 - 4. ELTKGQ

Question ID : 239087260
Status : Answered
Chosen Option : 4

Q.4 Read the given statements and conclusions carefully. Assuming that the information given in the statements is true, even if it appears to be at variance with commonly known facts, decide which of the given conclusions logically follow(s) from the statements.

Statements:

- I. No A is B.
- II. All C are D.
- III. Some C are B.

Conclusions:

- I. Some D are B.
- II. Some B are C.
- III. All C are B.

- Ans
- 1. Both conclusions I and II follow.
 - 2. Both conclusions I and III follow.
 - 3. Only conclusion III follows.
 - 4. Only conclusion II follows.


Question ID : 239087267
Status : Answered
Chosen Option : 1

Q.5 Select the option in which the given figure is embedded. (Rotation is not allowed)

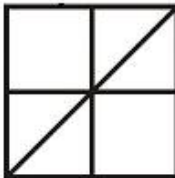


Ans

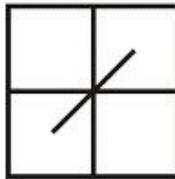
1.



2.



3.



4.



Question ID : 239087277
Status : Answered
Chosen Option : 4

Q.6 In a certain code language, 'ROK' is written as '44' and 'MIG' is written as '29'. What will be the code for 'TAL' in that code language?

- Ans
- 1. 33
 - 2. 34
 - 3. 41
 - 4. 43

Question ID : 239087262
Status : Answered
Chosen Option : 1

Q.7 Which two signs need to be interchanged to make the following equation correct?

$$73 - 13 \times 42 \div 14 + 56 = 56$$

- Ans
- 1. + and \times
 - 2. \times and \div
 - 3. - and +
 - 4. - and \times

Question ID : 239087274
Status : Answered
Chosen Option : 3

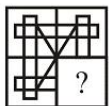
Q.8 Select the option that is related to the third number in the same way as the second number is related to the first number.

$$35 : 66 :: 29 : ?$$

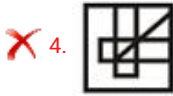
- Ans
- 1. 63
 - 2. 62
 - 3. 60
 - 4. 57

Question ID : 239087271
Status : Not Answered
Chosen Option : --

Q.9 Study the given pattern carefully and select the figure that will complete the pattern given in the question figure.



- Ans
- 1.
 - 2.
 - 3.



Question ID : 239087276

Status : Answered

Chosen Option : 2

Q.10 In a certain code language, 'PING' is written as '4' and 'METAL' is written as '5'. What will be the code for 'STEADYS' in that code language?

Ans 1. 8

2. 7

3. 5

4. 6

Question ID : 239087263

Status : Answered

Chosen Option : 2

Q.11 Read the given statements and conclusions carefully. Assuming that the information given in the statements is true, even if it appears to be at variance with commonly known facts, decide which of the given conclusions logically follow(s) from the statements.

Statements:

I. Some red are rat.

II. Some rat are wild.

Conclusions:

I. Some wild are rat.

II. All wild are rat.

III. Some red are wild.

Ans 1. None of the conclusions follows.

2. Only conclusion I follows.

3. Only conclusion III follows.

4. Only conclusion II follows.

Question ID : 239087268

Status : Answered

Chosen Option : 2

Q.12 Select the number that can replace the question mark (?) in the following series.

16, 20, 29, 45, 70, ?

Ans 1. 106

2. 116

3. 96

4. 126

Question ID : 239087270

Status : Answered

Chosen Option : 1

Q.13 Six laptops, N, Q, P, L, R and A, are placed in a row facing towards the north (not necessarily in the same order). N is placed to the immediate left of A. R is placed second to the left of Q. P is placed second to the right of A. P is placed to the immediate right of R. L is placed to the left of N. Which laptop is placed to the immediate right of L?

- Ans 1. N
 2. Q
 3. P
 4. A

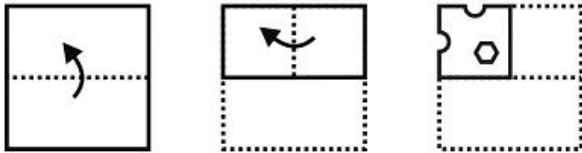
Question ID : 239087264
 Status : Answered
 Chosen Option : 1

Q.14 If the two signs, '+' and '÷' are interchanged, which of the following equations will be correct?

- Ans 1. $16 \div 9 + 4 \times 8 = 34$
 2. $16 \div 21 + 13 \times 26 = 56$
 3. $11 + 13 \times 4 \div 2 = 37$
 4. $13 \times 9 + 16 \div 2 = 125$

Question ID : 239087273
 Status : Not Answered
 Chosen Option : --

Q.15 A paper is folded and cut as shown below. How will it appear when unfolded?



Ans

- 1.
- 2.
- 3.
- 4.

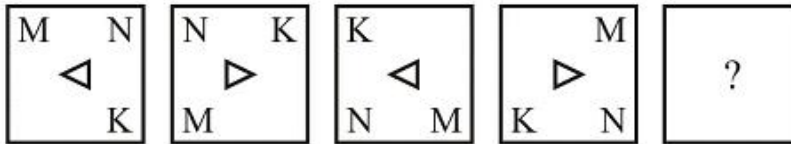
Question ID : 239087279

Q.16 Select the number that can replace the question mark (?) in the following series.

31, 44, 58, 73, 89, ?

- Ans
- 1. 105
 - 2. 106
 - 3. 115
 - 4. 116

Q.17 Select the option figure that will come next in the following series.



Ans

- 1.
- 2.
- 3.
- 4.

Q.18 Identify the Venn diagram that best represents the relationship between the given classes.

Painter, Lawyer, Singer

Ans

- 1.



Question ID : 239087280
Status : Answered
Chosen Option : 1

Q.19 Select the letter-pair that can replace the question mark (?) in the following series.

AR, CU, EX, GA, ?

- Ans 1. JE
 2. ID
 3. IF
 4. KF

Question ID : 239087256
Status : Answered
Chosen Option : 2

Q.20 Select the word pair in which the two words are related in the same way as the two words in the following word-pair.

Five : Pentagon

- Ans 1. Four : Rectangle
 2. Triangle : Three
 3. Square : Four
 4. Six : Septagon

Question ID : 239087258
Status : Answered
Chosen Option : 1

Q.21 Study the given pattern carefully and select the number that can replace the question mark (?) in it.

7 6 3 48
4 9 8 63
2 5 7 ?

- Ans 1. 28
 2. 42
 3. 52
 4. 56

Question ID : 239087272

Status : Not Answered

Chosen Option : --

Q.22 In a certain code language, 'GROUND' is written as 'BMJPIY'. What will be the code for 'FREAK' in that code language?

- Ans
- 1. BOAYH
 - 2. AMYVF
 - 3. BNAWG
 - 4. AMZVF

Question ID : 239087261

Status : Answered

Chosen Option : 4

Q.23 Select the option that is related to the third term in the same way as the second term is related to the first term.

Colour : Red :: Profession : ?

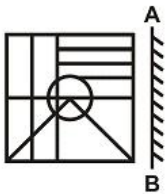
- Ans
- 1. Lawyer
 - 2. Court
 - 3. School
 - 4. Black

Question ID : 239087257

Status : Answered

Chosen Option : 1

Q.24 Select the correct mirror image of the given figure when the mirror is placed at line AB.



Ans

- 1.
- 2.
- 3.

4.



Question ID : 239087278

Status : Answered

Chosen Option : 1

Q.25 Select the option in which the letters share the same relationship as that shared by the given pair of letters.

JT : NX

Ans 1. TP : XT

2. RK : VG

3. GS : KU

4. LD : PG

Question ID : 239087259

Status : Answered

Chosen Option : 1

Section : Numerical Aptitude

Q.1 A travels 15 km with a speed of 30 km/h. He travels another 25 km with a speed of 10 km/h. What is his average speed for the entire journey?

Ans 1. $\frac{40}{3}$ km/h

2. $\frac{80}{3}$ km/h

3. 20 km/h

4. 12 km/h

Question ID : 239087398

Status : Not Answered

Chosen Option : --

Q.2 If $P : Q = 5 : 2$, then $(2P - 3Q) : (3P - 5Q)$ is equal to:

Ans 1. 5 : 6

2. 2 : 7

3. 4 : 5

4. 3 : 4

Question ID : 239087393

Status : Answered

Chosen Option : 3

Q.3

The Table given below presents the number of books on different subjects kept on separate shelves. Subjects with odd and even numbers are of Arts and Science respectively.

Subjects	Number of books
S1	26
S2	29
S3	31
S4	34
S5	36
S6	38
S7	44

What is the ratio of the number of books of S1 and the average number of books per subject?

- Ans 1. 13 : 17
 2. 18 : 13
 3. 14 : 17
 4. 14 : 13

Question ID : 239087404
Status : Answered
Chosen Option : 1

Q.4 What will be the compound interest on a sum of ₹1200 for 2 years at the rate of 20% per annum when the interest is compounded yearly?

- Ans 1. ₹624
 2. ₹504
 3. ₹576
 4. ₹528

Question ID : 239087395
Status : Answered
Chosen Option : 4

Q.5 The simple interest on a sum for a certain number of years, same as the rate percentage of the interest, is equal to the sum itself. The number of years is equal to:

- Ans 1. 5
 2. 10
 3. 8
 4. 1

Question ID : 239087394
Status : Not Answered
Chosen Option : --

Q.6 Pipe A can fill a tank in 6 hours. Pipe B can fill the same tank in 8 hours. Pipe A, B and C together can fill the same tank in 12 hours. Then which of the following statements is true for pipe C?

- Ans 1. It can fill the tank in 4 hours 40 minutes
 2. It can fill the tank in 4 hours 48 minutes
 3. It can empty the tank in 4 hours 48 minutes
 4. It can empty the tank in 4 hours 40 minutes

Question ID : 239087396
Status : Answered
Chosen Option : 3

Q.7 By selling an article for ₹320, a man incurs a loss of 20%. What should be the selling price of an article to gain 20%?

- Ans
- 1. ₹450
 - 2. ₹480
 - 3. ₹420
 - 4. ₹500

Question ID : 239087390
Status : Answered
Chosen Option : 2

Q.8 0.1 percent of 1.728×10^6 spherical droplets of water, each of diameter 2 mm, coalesce to form a spherical bubble. What is the diameter (in cm) of the bubble?

- Ans
- 1. 1.2
 - 2. 1.6
 - 3. 1.8
 - 4. 2.4

Question ID : 239087402
Status : Not Answered
Chosen Option : --

Q.9 The ratio of monthly incomes of Pawan and Sunil is 4 : 3 and the ratio of their monthly expenditures is 3 : 2. If Pawan and Sunil save ₹4000 and ₹6000 respectively per month, then what is the sum of their monthly incomes?

- Ans
- 1. ₹60000
 - 2. ₹70000
 - 3. ₹50000
 - 4. ₹36000

Question ID : 239087391
Status : Not Answered
Chosen Option : --

Q.10 What is the value of

$$32 \div 4 \text{ of } 2 \times 3 + \left[5 \text{ of } 6 - \{ 7 \text{ of } 8 (10 + 6 \text{ of } \frac{5}{6} \div 5 - 1) \div 80 \} \right] - 7 \times 3 \div 2?$$

- Ans
- 1. 7.5
 - 2. 17.5
 - 3. 12.5
 - 4. 24.5

Question ID : 239087382
Status : Answered
Chosen Option : 1

Q.11

What is the value of

$$\frac{72 \div 9 + 3 - 6 - (2 \times 3) + 5 \text{ of } 3 - (1 + 5 \times 2 - 2)}{8 \div 4 + 2 - (6 \times 8 \div 2) + (7 \times 4 - 2 \times 2)} ?$$

- Ans
- 1. $\frac{11}{4}$
 - 2. $\frac{5}{4}$
 - 3. 0
 - 4. $\frac{15}{4}$

Question ID : 239087383
Status : Answered
Chosen Option : 2

Q.12 If the volumes of two cubes are in the ratio of 64 : 125, then what is the ratio of their total surface areas?

- Ans
- 1. 9 : 16
 - 2. 4 : 5
 - 3. 16 : 25
 - 4. 64 : 125

Question ID : 239087400
Status : Answered
Chosen Option : 3

Q.13 The average of 13 numbers is 42. If a 14th number is included, then the average becomes 44. What is the 14th number?

- Ans
- 1. 70
 - 2. 62
 - 3. 66
 - 4. 68

Question ID : 239087384
Status : Answered
Chosen Option : 1

Q.14 Radius of base of a right circular cone and a sphere is each equal to r . If the sphere and the cone have the same volume, then what is the height of the cone?

- Ans
- 1. $7r$
 - 2. $4r$
 - 3. $2r$
 - 4. $3r$

Question ID : 239087401
Status : Answered
Chosen Option : 2

Q.15 What is a single discount equivalent to two successive discounts of 10% and 15%?

- Ans
- 1. 21.5%

✓ 2. 23.5%

✗ 3. 25%

✗ 4. 26.5%

Question ID : 239087386

Status : Answered

Chosen Option : 2

Q.16 Selling price of an article is $\frac{8}{7}$ of cost price. What is the profit percentage?

Ans ✗ 1. $\frac{100}{9}$

✗ 2. $\frac{100}{11}$

✗ 3. $\frac{100}{8}$

✓ 4. $\frac{100}{7}$

Question ID : 239087389

Status : Answered

Chosen Option : 4

Q.17 What is the HCF of $2^3 \times 3^4$ and $2^5 \times 3^2$?

Ans ✗ 1. $2^5 \times 3^3$

✗ 2. $2^3 \times 3^4$

✓ 3. $2^3 \times 3^2$

✗ 4. $2^5 \times 3^4$

Question ID : 239087381

Status : Answered

Chosen Option : 3

Q.18 A number is first increased by 20% and then reduced by 15%. If the final value is 2040, then what is the initial value of the number?

Ans ✗ 1. 2100

✗ 2. 1800

✓ 3. 2000

✗ 4. 1900

Question ID : 239087388

Status : Answered

Chosen Option : 3

Q.19 The daily average rainfall on 5 days of a week is 30 mm. If the rainfall on 6th and 7th day are 42 mm and 25 mm respectively, then what is the average daily rainfall for the 7 days?

Ans ✓ 1. 31

✗ 2. 29.5

~~X~~ 3. 33

~~X~~ 4. 28.5

Question ID : 239087385

Status : Answered

Chosen Option : 1

Q.20 The Table given below presents the number of books on different subjects kept on separate shelves. Subjects with odd and even numbers are of Arts and Science respectively.

Subjects	Number of books
S1	26
S2	29
S3	31
S4	34
S5	36
S6	38
S7	44

The number of books of S3 is what percent (correct to one decimal place) of the average number of Science books?

Ans 1. 92.1

~~X~~ 2. 91.2

~~X~~ 3. 93.1

~~X~~ 4. 90.7

Question ID : 239087405

Status : Answered

Chosen Option : 3

Q.21 The Table given below shows the number of students having obtained different marks.

Marks	Number of Students
9 – 11	6
11 – 13	5
13 – 15	2
15 – 17	2
17 – 19	5

What is the mean marks per student?

Ans 1. 13.5

~~X~~ 2. 12.25

~~X~~ 3. 15.5

~~X~~ 4. 14.25

Question ID : 239087387

Status : Answered

Chosen Option : 4

Q.22 If $\frac{a}{b} = \frac{3}{4}$, $\frac{b}{c} = \frac{4}{5}$ and $\frac{c}{d} = \frac{5}{6}$, then the sum of the numerator and the denominator (which are coprimes) of $\left(\frac{a}{d}\right)^{10}$ is:

Ans 1. 1025

~~X~~ 2. 4097

~~X~~ 3. 2049

Question ID : 239087392
Status : Answered
Chosen Option : 1

Q.23 A man leaves from P at 6 am and reaches Q at 2 pm on the same day. Another man leaves Q at 8 am and reaches P at 3 pm on the same day. At what time do they meet?

- Ans**
- 1. 11 : 46 am
 - 2. 11 : 24 am
 - 3. 10 : 48 am
 - 4. 11 : 00 am

Question ID : 239087399
Status : Not Answered
Chosen Option : --

Q.24 The Table given below presents the number of books on different subjects kept on separate shelves. Subjects with odd and even numbers are of Arts and Science respectively.

Subjects	Number of books
S1	26
S2	29
S3	31
S4	34
S5	36
S6	38
S7	44

What is the ratio of the total number of books on Arts to that of Science?

- Ans**
- 1. 141 : 97
 - 2. 145 : 93
 - 3. 137 : 101
 - 4. 149 : 89

Question ID : 239087403
Status : Answered
Chosen Option : 3

Q.25 Two teachers A and B can complete an academic work in 10 days and 15 days respectively. They started the work together, but A left after 5 days and another teacher C joined, who alone can complete the work in 60 days. In how many days the work got completed?

- Ans**
- 1. 7
 - 2. 5
 - 3. 6
 - 4. 2

Question ID : 239087397
Status : Answered
Chosen Option : 3

Q.1 Which article of Indian constitution deals with discrimination against any Indian citizen on various grounds?

- Ans
- 1. Article 11
 - 2. Article 19
 - 3. Article 13
 - 4. Article 15

Question ID : 239087142
Status : Answered
Chosen Option : 4

Q.2 Silver Fiber Revolution is associated to:

- Ans
- 1. Leather
 - 2. Oil seeds
 - 3. Jute
 - 4. Cotton

Question ID : 239087139
Status : Answered
Chosen Option : 4

Q.3 The Indian Standard Time is calculated from the clock tower of _____.

- Ans
- 1. Hamirpur
 - 2. Rampur
 - 3. Mirzapur
 - 4. Sambalpur

Question ID : 239087151
Status : Not Answered
Chosen Option : --

Q.4 Who among the following was the first Indian woman to swim across the English Channel?

- Ans
- 1. Arati Saha
 - 2. Ujwala Rai
 - 3. Nisha Millet
 - 4. Karnam Malleswari

Question ID : 239087137
Status : Answered
Chosen Option : 1

Q.5 The name of UTI Bank was changed to _____ in 2007.

- Ans
- 1. HDFC Bank
 - 2. IDBI Bank
 - 3. Centurion Bank
 - 4. Axis Bank

Question ID : 239087140
Status : Not Answered

Chosen Option : --

Q.6 Which party government announced the formation of a second backward classes commission in 1978?

- Ans
- 1. Indian National Congress Party
 - 2. Bharatiya Janata Party
 - 3. Janata Party
 - 4. United Democratic Party

Question ID : 239087143
Status : Answered
Chosen Option : 3

Q.7 Who is the writer of 'Becoming'?

- Ans
- 1. Jhumpa Lahiri
 - 2. Sudha Murthy
 - 3. Michelle Obama
 - 4. Hillary Clinton

Question ID : 239087136
Status : Not Answered
Chosen Option : --

Q.8 Blue jay or Indian Roller is the state bird of how many Indian states?

- Ans
- 1. 4
 - 2. 5
 - 3. 2
 - 4. 3

Question ID : 239087149
Status : Not Answered
Chosen Option : --


Q.9 The upper part of the respiratory tract is provided with small hair-like structures called _____.

- Ans
- 1. bronchi
 - 2. cilia
 - 3. villi
 - 4. alveoli

Question ID : 239087147
Status : Answered
Chosen Option : 1

Q.10 Which of the following is declared as world heritage site by UNESCO in 2018?

- Ans
- 1. Rani ki vav
 - 2. The Victorian Gothic and Art Deco Ensembles of Mumbai
 - 3. Historic city of Ahmedabad

 4. The Architectural Works of Le Corbusier

Question ID : 239087133
Status : **Not Answered**
Chosen Option : --

Q.11 Which of the following gas causes explosion in coal mines?

- Ans
-  1. Carbon dioxide
 -  2. Nitrogen
 -  3. Butane
 -  4. Methane

Question ID : 239087145
Status : **Answered**
Chosen Option : 4

Q.12 What is the contribution of agriculture sector in GDP of India in 2017-18?

- Ans
-  1. 0.154
 -  2. 0.192
 -  3. 0.16
 -  4. 0.171

Question ID : 239087141
Status : **Not Answered**
Chosen Option : --

Q.13 Pin valley National park is situated in:

- Ans
-  1. Andhra Pradesh
 -  2. Arunachal Pradesh
 -  3. Himachal Pradesh
 -  4. Madhya Pradesh

Question ID : 239087150
Status : **Answered**
Chosen Option : 2

Q.14 Bhawai is a folk dance of which state?

- Ans
-  1. Haryana
 -  2. Maharashtra
 -  3. Gujarat
 -  4. Rajasthan

Question ID : 239087131
Status : **Not Answered**
Chosen Option : --

Q.15 Who is known as the father of Blue Revolution in India?

- Ans
-  1. Verghese Kurien
 -  2. Sam Pitroda

✓ 3. Hiralal Chaudhuri

✗ 4. M.S. Swaminathan

Question ID : 239087152
Status : Answered
Chosen Option : 3

Q.16 Dibyendu Barua is associated with which of the following sport?

Ans ✓ 1. Chess

✗ 2. Hockey

✗ 3. Snooker

✗ 4. Tennis

Question ID : 239087134
Status : Not Answered
Chosen Option : --

Q.17 Which of the following is NOT a nuclear power station?

Ans ✓ 1. Ramagundam

✗ 2. Rawat Bhata

✗ 3. Naraura

✗ 4. Kalpakkam

Question ID : 239087146
Status : Answered
Chosen Option : 3

Q.18 When did the Quit India Movement Start?

Ans ✗ 1. 1930

✓ 2. 1942

✗ 3. 1932

✗ 4. 1940

Question ID : 239087155
Status : Answered
Chosen Option : 2

Q.19 Which of the following temple is built by Rastrakutas Dynasty?

Ans ✓ 1. Kailash Temple

✗ 2. Adi Kumbeswarar

✗ 3. Brihadeshwara Temple

✗ 4. Chennakeshava Temple

Question ID : 239087153
Status : Answered
Chosen Option : 1

Q.20 In which field 'Saraswati Samman' award is given?

Ans ✗ 1. Music

2. Literature

3. Journalism

4. Dance

Question ID : 239087138

Status : Answered

Chosen Option : 2

Q.21 Name the Indian sprinter who won the gold medal in women's 100m in World Universiade, 30th Summer University Games held in Naples, Italy?

Ans 1. Dutee Chand

2. Pinki Pramanik

3. Hima Das

4. Santhi Soundara

Question ID : 239087135

Status : Answered

Chosen Option : 3

Q.22 _____ is the study of ancient plants, like mosses, that grow in moist, humid environments.

Ans 1. Ethnobotany

2. Bryology

3. Palynology

4. Dendrology

Question ID : 239087148

Status : Answered

Chosen Option : 2

Q.23 Which of the following committees recommended inclusion of fundamental duties?

Ans 1. Tarapore Committee

2. Radha Krishnan Committee

3. Balwantrai Mehta Committee

4. Swaran Singh Committee

Question ID : 239087144

Status : Answered

Chosen Option : 4

Q.24 Who became the Nawab of Bengal after Alivardi Khan?

Ans 1. Sarfaraaz Khan

2. Shuj-ud-din Muhammad Khan

3. Siraj-ud-Daulah

4. Mir Zafar

Question ID : 239087154

Status : Answered

Chosen Option : 3

Q.25 Who among the following was popularly known as the 'parrot of India'?

- Ans
- 1. Tansen
 - 2. Ibn Battuta
 - 3. Amīr Khosrow
 - 4. Ziauddin Barani

Question ID : 239087132
Status : Answered
Chosen Option : 3